

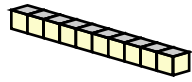
Name : _____

Score : _____

Teacher : _____

Date : _____

Find the value of each group of base ten blocks.

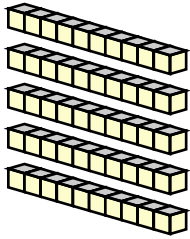


$= 10$



$= 1$

1)



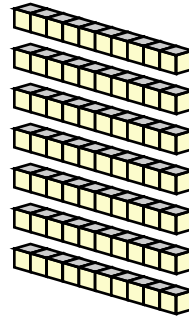
Tens



Ones

Total

5)



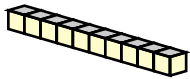
Tens



Ones

Total

2)



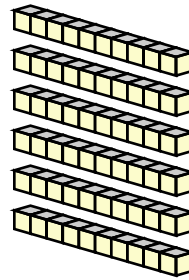
Tens



Ones

Total

6)



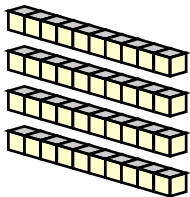
Tens



Ones

Total

3)



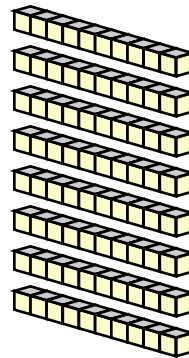
Tens



Ones

Total

7)



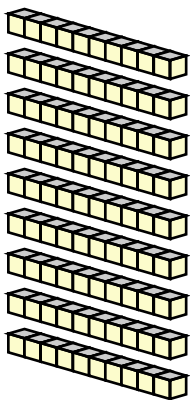
Tens



Ones

Total

4)



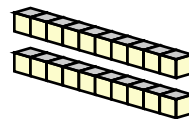
Tens



Ones

Total

8)



Tens



Ones

Total



Name : _____

Score : _____

Teacher : _____

Date : _____

Find the value of each group of base ten blocks.

1) 59

2) 14

3) 41

4) 98

5) 75

6) 63

7) 82

8) 26

